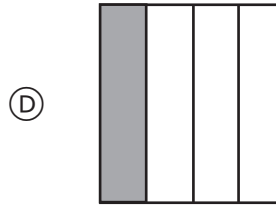
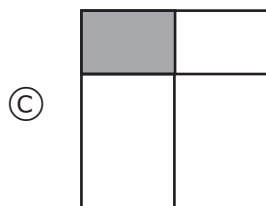
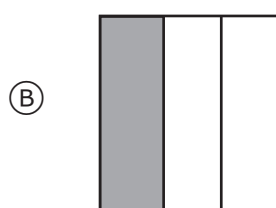
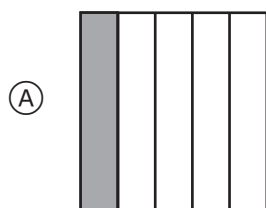



Který obdélník má $\frac{1}{4}$ vybarvenou?



M041298

Petra napsala na tabuli číslo.
Dan potom dvě jeho číslice smazal.



Petřino číslo mělo 6 desítek. Které číslo by to mohlo být?

- (A) 5 668
- (B) 56 008
- (C) 56 608
- (D) 56 668

M041007